













Assignment-6 Class – I Subject: Maths Teacher Name: Mrs. Paramjeet Kaur

Name _____ Class & Sec _____ Roll No: _____ Date: 10.11.2021

Q1) Write the time in two ways :

<p>1 a.</p>  <p>_____ : _____</p>	<p>1 b.</p>  <p>_____ : _____</p>
<p>2 a.</p>  <p>_____ : _____</p>	<p>2 b.</p>  <p>_____ : _____</p>
<p>3 a.</p>  <p>_____ : _____</p>	<p>3 b.</p>  <p>_____ : _____</p>

Q2) Draw the hands on the clock.

<p>1 a.</p>  <p>7:00</p>	<p>1 b.</p>  <p>6:00</p>	<p>1 c.</p>  <p>4:00</p>
<p>2 a.</p>  <p>9:00</p>	<p>2 b.</p>  <p>8:00</p>	<p>2 c.</p>  <p>3:00</p>

Q3) Fill in the missing days of the week.

Monday
Thursday
Saturday

Monday Tuesday Wednesday Thursday Friday Saturday Sunday

Q4) Fill in the blanks:

1. A week has _____ days.
2. The long hand of the clock is the _____ hand.
3. The short hand of the clock is the _____ hand.
4. _____ is the first day of the week.
5. _____ is the last day of the week.
6. Thursday comes before _____
7. _____ comes between Tuesday and Thursday.
8. _____ comes after Sunday.
9. _____ comes before Saturday.